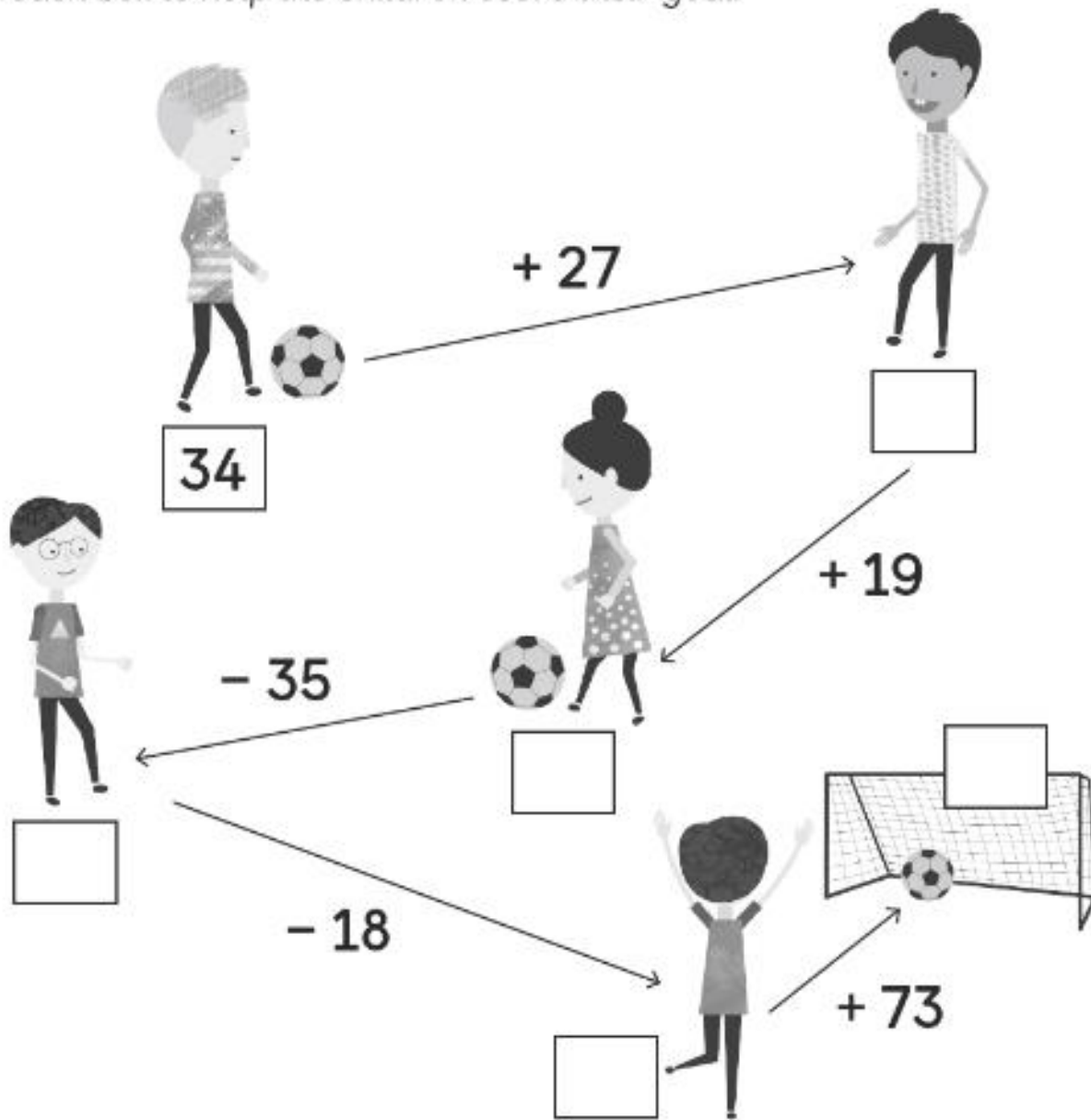




Year 2 Maths Homework

Given out Friday 26.1.18
Due in Wednesday 31.1.18

Complete the addition and subtraction by writing the correct answer in each box to help the children score their goal.



If you have time do these:

Add the following three numbers.

(a) $5 + 5 + 5 = \square$

(b) $2 + 3 + 7 = \square$

(c) $3 + 3 + 8 = \square$

(d) $10 + 9 + 4 = \square$

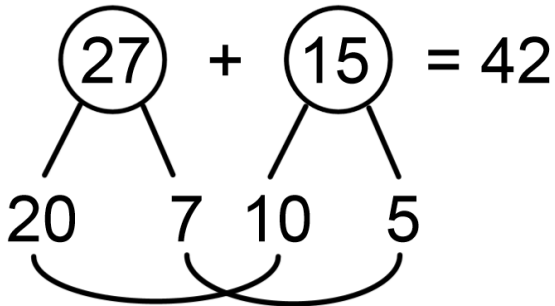
(e) $5 + 2 + 9 = \square$

(f) $3 + 8 + 8 = \square$

Here are some methods we have learned in class that could help you.

ADDITION METHODS

Partitioning Method



$$20 + 10 = 30$$

$$7 + 5 = 12$$

$$30 + 12 = 42$$

Column Method

tens	ones	
2	7	
+	1	5
1	2	← Step 1: add the ones 7 + 5 = 12

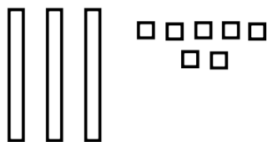
tens	ones	
2	7	
+	1	5
1	2	
3	0	← Step 2: add the tens 2 tens + 1 ten = 3 tens Add a placeholder in the ones column.

tens	ones	
2	7	
+	1	5
1	2	
3	0	
4	2	← Step 3: Add the ones and tens. 2 ones + 0 = 2 ones 3 tens + 1 ten = 4 tens 27 + 15 = 42

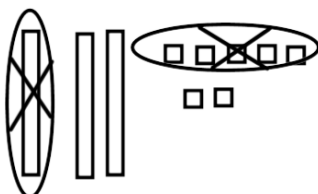
SUBTRACTION METHODS

Draw it: $27 - 15 = 12$

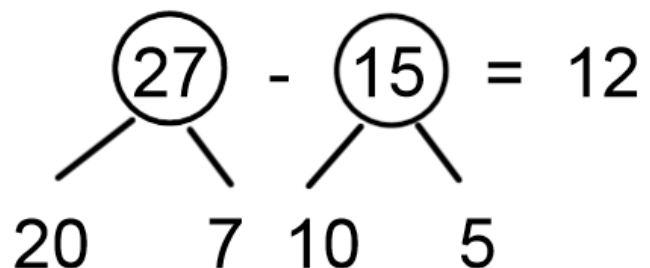
Draw 27 (each long stick represents 10 and the small squares are ones).



Circle (or cross off) a ten and 5 ones to represent 15 and count what's left (12).



Partition:



$$20 - 10 = 10$$

$$7 - 5 = 2$$

$$10 + 2 = 12$$